



Match each equation to answer and write the answer.

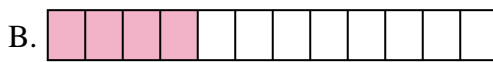
Answers

Ex) $\frac{1}{6} + \frac{1}{6}$



Ex. 0

1) $\frac{1}{5} + \frac{1}{5}$



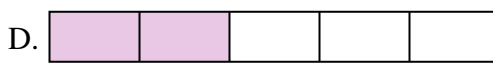
1. _____

2) $\frac{1}{5} + \frac{1}{5}$




2. _____

3) $\frac{1}{5} + \frac{1}{5}$



3. _____

4) $\frac{1}{6} + \frac{1}{6} + \frac{1}{6} + \frac{1}{6} + \frac{1}{6}$



4. _____

5) $\frac{1}{4} + \frac{1}{4} + \frac{1}{4}$



6. _____

6) $\frac{1}{3} + \frac{1}{3}$



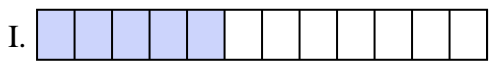
7. _____

7) $\frac{1}{5} + \frac{1}{5} + \frac{1}{5} + \frac{1}{5}$



8. _____

8) $\frac{1}{10} + \frac{1}{10} + \frac{1}{10}$



9. _____

9) $\frac{1}{10} + \frac{1}{10} + \frac{1}{10} + \frac{1}{10} + \frac{1}{10} + \frac{1}{10}$



10. _____

10) $\frac{1}{10} + \frac{1}{10} + \frac{1}{10} + \frac{1}{10} + \frac{1}{10} + \frac{1}{10}$



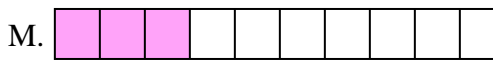
11. _____

11) $\frac{1}{12} + \frac{1}{12} + \frac{1}{12} + \frac{1}{12}$



12. _____

12) $\frac{1}{5} + \frac{1}{5}$



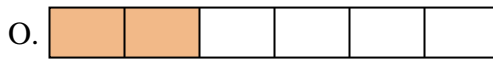
13. _____

13) $\frac{1}{4} + \frac{1}{4}$



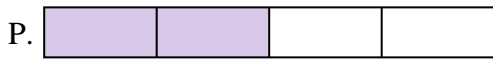
14. _____

14) $\frac{1}{3} + \frac{1}{3}$



15. _____


15) $\frac{1}{4} + \frac{1}{4}$





Match each equation to answer and write the answer.

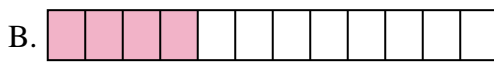
Ex) $\frac{1}{6} + \frac{1}{6}$



Answers

Ex. O

1) $\frac{1}{5} + \frac{1}{5}$



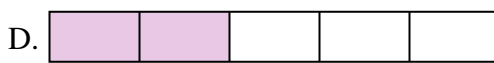
1. D

2) $\frac{1}{5} + \frac{1}{5}$




2. D

3) $\frac{1}{5} + \frac{1}{5}$



3. D

4) $\frac{1}{6} + \frac{1}{6} + \frac{1}{6} + \frac{1}{6} + \frac{1}{6}$



4. N

5) $\frac{1}{4} + \frac{1}{4} + \frac{1}{4}$



5. K

6) $\frac{1}{3} + \frac{1}{3}$



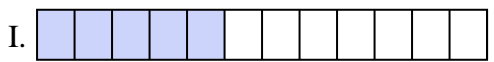
6. F

7) $\frac{1}{5} + \frac{1}{5} + \frac{1}{5} + \frac{1}{5}$



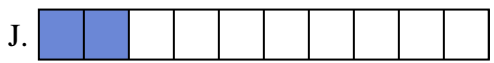
7. C

8) $\frac{1}{10} + \frac{1}{10} + \frac{1}{10}$



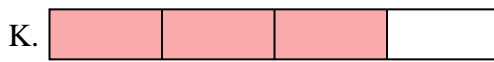
8. M

9) $\frac{1}{10} + \frac{1}{10} + \frac{1}{10} + \frac{1}{10} + \frac{1}{10} + \frac{1}{10}$



9. G

10) $\frac{1}{10} + \frac{1}{10} + \frac{1}{10} + \frac{1}{10} + \frac{1}{10} + \frac{1}{10}$



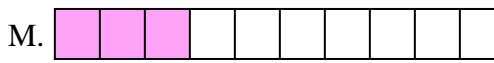
10. G

11) $\frac{1}{12} + \frac{1}{12} + \frac{1}{12} + \frac{1}{12}$



11. B

12) $\frac{1}{5} + \frac{1}{5}$



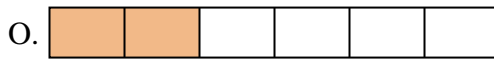
12. D

13) $\frac{1}{4} + \frac{1}{4}$



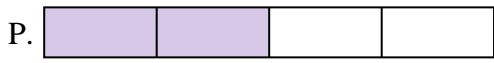
13. P

14) $\frac{1}{3} + \frac{1}{3}$



14. F

15) $\frac{1}{4} + \frac{1}{4}$



15. P